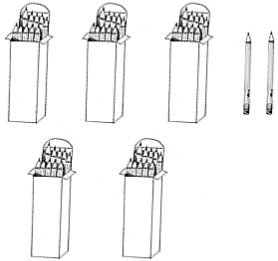

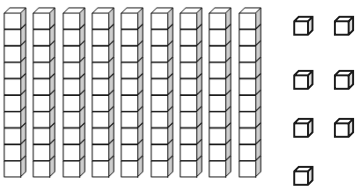
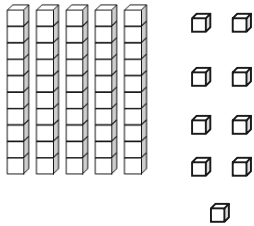
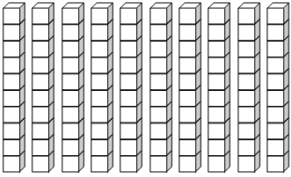
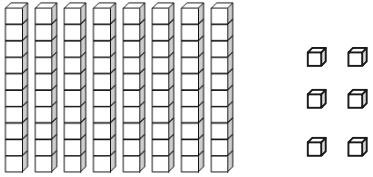

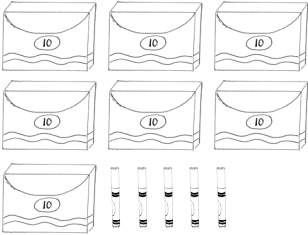


Name \_\_\_\_\_

Date \_\_\_\_\_

Write the tens and ones. Complete the statement.

<p>1.</p>  <table border="1" style="margin-left: auto; margin-right: auto; text-align: center; width: 100px; height: 80px;"> <thead> <tr> <th style="padding: 5px;">tens</th> <th style="padding: 5px;">ones</th> </tr> </thead> <tbody> <tr> <td style="height: 70px;"></td> <td style="height: 70px;"></td> </tr> </tbody> </table> <p style="text-align: center; margin-top: 20px;"><b>52 = _____ tens _____ ones</b></p>	tens	ones			<p>2.</p>  <table border="1" style="margin-left: auto; margin-right: auto; text-align: center; width: 100px; height: 80px;"> <thead> <tr> <th style="padding: 5px;">tens</th> <th style="padding: 5px;">ones</th> </tr> </thead> <tbody> <tr> <td style="height: 70px;"></td> <td style="height: 70px;"></td> </tr> </tbody> </table> <p style="text-align: center; margin-top: 20px;">_____ = _____ tens _____ ones</p>	tens	ones		
tens	ones								
tens	ones								
<p>3.</p>  <table border="1" style="margin-left: auto; margin-right: auto; text-align: center; width: 100px; height: 80px;"> <thead> <tr> <th style="padding: 5px;">tens</th> <th style="padding: 5px;">ones</th> </tr> </thead> <tbody> <tr> <td style="height: 70px;"></td> <td style="height: 70px;"></td> </tr> </tbody> </table> <p style="text-align: center; margin-top: 20px;">There are _____ cubes.</p>	tens	ones			<p>4.</p>  <table border="1" style="margin-left: auto; margin-right: auto; text-align: center; width: 100px; height: 80px;"> <thead> <tr> <th style="padding: 5px;">tens</th> <th style="padding: 5px;">ones</th> </tr> </thead> <tbody> <tr> <td style="height: 70px;"></td> <td style="height: 70px;"></td> </tr> </tbody> </table> <p style="text-align: center; margin-top: 20px;">There are _____ cubes.</p>	tens	ones		
tens	ones								
tens	ones								
<p>5.</p>  <table border="1" style="margin-left: auto; margin-right: auto; text-align: center; width: 100px; height: 80px;"> <thead> <tr> <th style="padding: 5px;">tens</th> <th style="padding: 5px;">ones</th> </tr> </thead> <tbody> <tr> <td style="height: 70px;"></td> <td style="height: 70px;"></td> </tr> </tbody> </table> <p style="text-align: center; margin-top: 20px;">There are _____ cubes.</p>	tens	ones			<p>6.</p>  <table border="1" style="margin-left: auto; margin-right: auto; text-align: center; width: 100px; height: 80px;"> <thead> <tr> <th style="padding: 5px;">tens</th> <th style="padding: 5px;">ones</th> </tr> </thead> <tbody> <tr> <td style="height: 70px;"></td> <td style="height: 70px;"></td> </tr> </tbody> </table> <p style="text-align: center; margin-top: 20px;">There are _____ cubes.</p>	tens	ones		
tens	ones								
tens	ones								
<p>7.</p>  <table border="1" style="margin-left: auto; margin-right: auto; text-align: center; width: 100px; height: 80px;"> <thead> <tr> <th style="padding: 5px;">tens</th> <th style="padding: 5px;">ones</th> </tr> </thead> <tbody> <tr> <td style="height: 70px;"></td> <td style="height: 70px;"></td> </tr> </tbody> </table> <p style="text-align: center; margin-top: 20px;">There are _____ carrots.</p>	tens	ones			<p>8.</p>  <table border="1" style="margin-left: auto; margin-right: auto; text-align: center; width: 100px; height: 80px;"> <thead> <tr> <th style="padding: 5px;">tens</th> <th style="padding: 5px;">ones</th> </tr> </thead> <tbody> <tr> <td style="height: 70px;"></td> <td style="height: 70px;"></td> </tr> </tbody> </table> <p style="text-align: center; margin-top: 20px;">There are _____ markers.</p>	tens	ones		
tens	ones								
tens	ones								

9. Write the number as tens and ones in the place value chart, or use the place value chart to write the number.

a. 70

tens	ones

b. 76

tens	ones

c. \_\_\_\_\_

tens	ones
4	9

d. \_\_\_\_\_

tens	ones
9	4

e. 65

tens	ones

f. 60

tens	ones

g. 90

tens	ones

h. \_\_\_\_\_

tens	ones
10	0

i. \_\_\_\_\_

tens	ones
8	3

j. \_\_\_\_\_

tens	ones
8	0