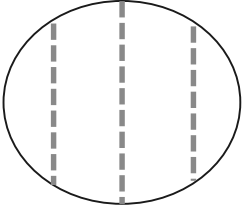
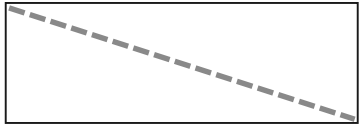
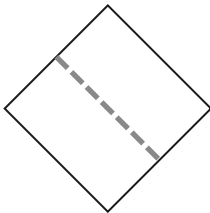
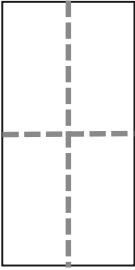
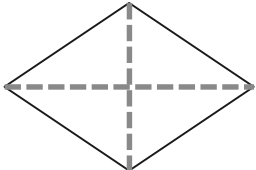
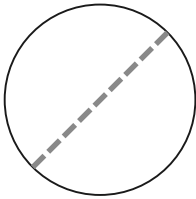
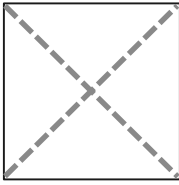
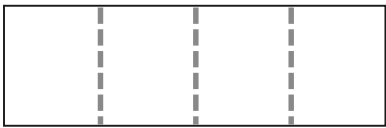


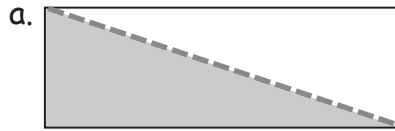
Name _____

Date _____

1. Circle the correct word(s) to tell how each shape is divided.

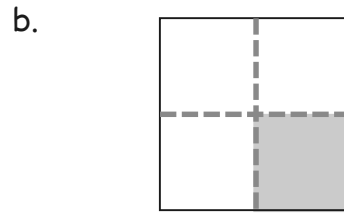
| | |
|---|---|
| <p>a.</p>  <p>equal parts unequal parts</p> | <p>b.</p>  <p>equal parts unequal parts</p> |
| <p>c.</p>  <p>halves fourths</p> | <p>d.</p>  <p>halves quarters</p> |
| <p>e.</p>  <p>halves quarters</p> | <p>f.</p>  <p>fourths halves</p> |
| <p>g.</p>  <p>quarters halves</p> | <p>h.</p>  <p>halves fourths</p> |

2. What part of the shape is shaded? Circle the correct answer.



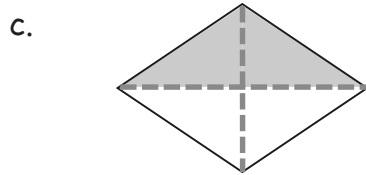
1 half

1 quarter



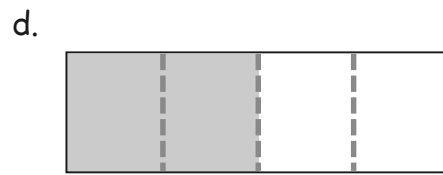
1 half

1 quarter



1 half

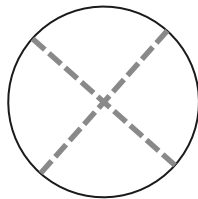
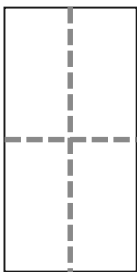
1 quarter



1 half

1 quarter

3. Color 1 quarter of each shape.



4. Color 1 half of each shape.

