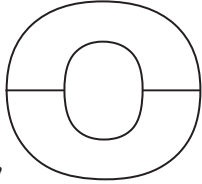

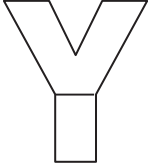
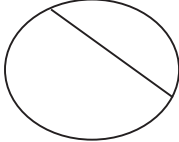
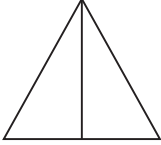
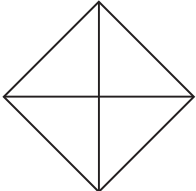
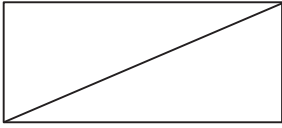
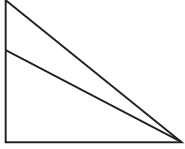
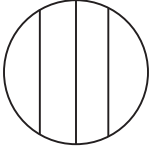
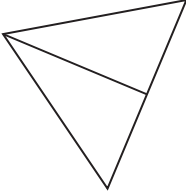
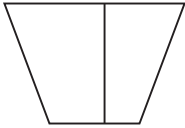
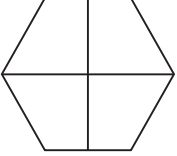





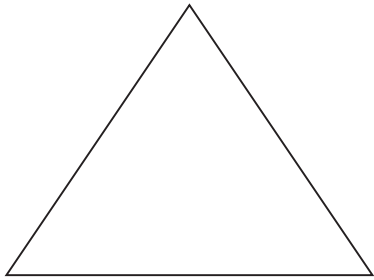
Name \_\_\_\_\_

Date \_\_\_\_\_

1. Are the shapes divided into equal parts? Write **Y** for yes or **N** for no. If the shape has equal parts, write how many equal parts there are on the line. The first one has been done for you.


|  |  |  |
|--|--|--|
| <p>a.</p>  <p><b>y</b>                      <b>2</b></p> <p>_____</p> | <p>b.</p>  <p>_____</p>   | <p>c.</p>  <p>_____</p>   |
| <p>d.</p>  <p>_____</p>   | <p>e.</p>  <p>_____</p>   | <p>f.</p>  <p>_____</p>   |
| <p>g.</p>  <p>_____</p>   | <p>h.</p>  <p>_____</p> | <p>i.</p>  <p>_____</p> |
| <p>j.</p>  <p>_____</p>   | <p>k.</p>  <p>_____</p> | <p>l.</p>  <p>_____</p> |
| <p>m.</p>  <p>_____</p>   | <p>n.</p>  <p>_____</p> | <p>o.</p>  <p>_____</p> |

2. Draw 1 line to make 2 equal parts. What smaller shapes did you make?



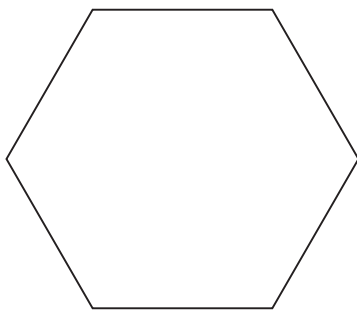
I made 2 \_\_\_\_\_.

3. Draw 2 lines to make 4 equal parts. What smaller shapes did you make?



I made 4 \_\_\_\_\_.

4. Draw lines to make 6 equal parts. What smaller shapes did you make?



I made 6 \_\_\_\_\_.