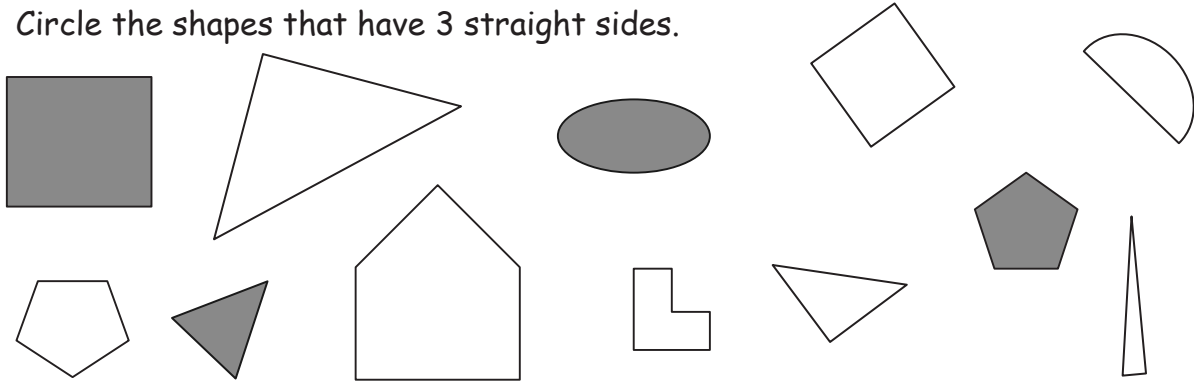


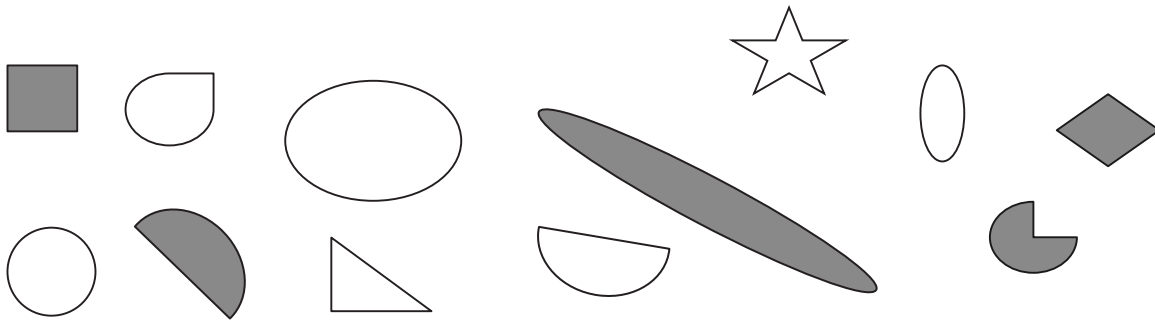
Name _____

Date _____

1. Circle the shapes that have 3 straight sides.



2. Circle the shapes that have no corners.



3. Circle the shapes that have only square corners.


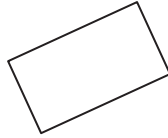



4. a. Draw a shape that has 4 straight sides.

b. Draw another shape with 4 straight sides that is different from 4(a) and from the ones above.

5. Which attributes, or characteristics, are the same for all of the shapes in Group A?

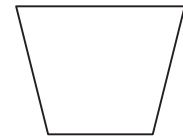
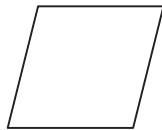

GROUP A



They all _____.

They all _____.

6. Circle the shape that best fits with Group A.



7. Draw 2 more shapes that would fit in Group A.

8. Draw 1 shape that would not fit in Group A.