






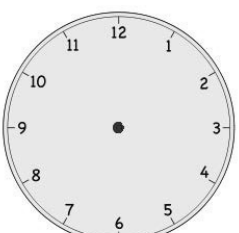

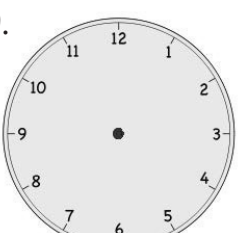


Name _____

Date _____


Write the time shown on the clock, or draw the missing hand(s) on the clock.

<p>1.</p>  <p>10 o'clock</p>	<p>2.</p>  <p>half past 10 o'clock</p>
<p>3.</p>  <p>8 o'clock</p>	<p>4.</p>  <p>_____</p>
<p>5.</p>  <p>3 o'clock</p>	<p>6.</p>  <p>half past 3 o'clock</p>
<p>7.</p>  <p>_____</p>	<p>8.</p>  <p>half past 6 o'clock</p>
<p>9.</p>  <p>half past 9 o'clock</p>	<p>10.</p>  <p>4 o'clock</p>

11. Match the pictures with the clocks.



Soccer practice
3:30



Brush teeth
7:30



Wash dishes
6:00



Eat dinner
5:30



Take bus home
4:30



Homework
half past 6 o'clock

